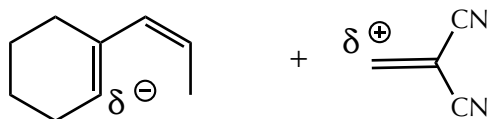
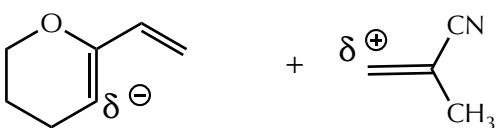


Assign the partial charges used to predict regioselectivity in the Diels-Alder reactions shown in Q15.11.

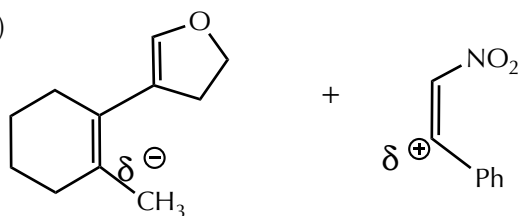
(a)



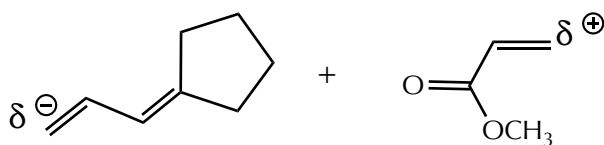
(b)



(c)



(d)



(e)

